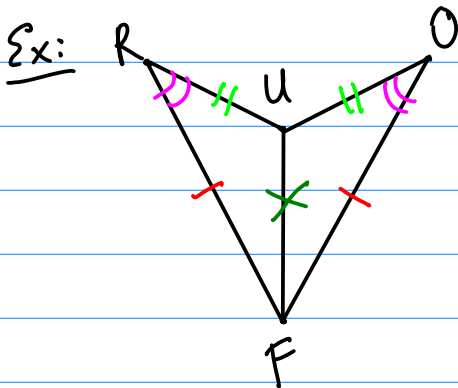
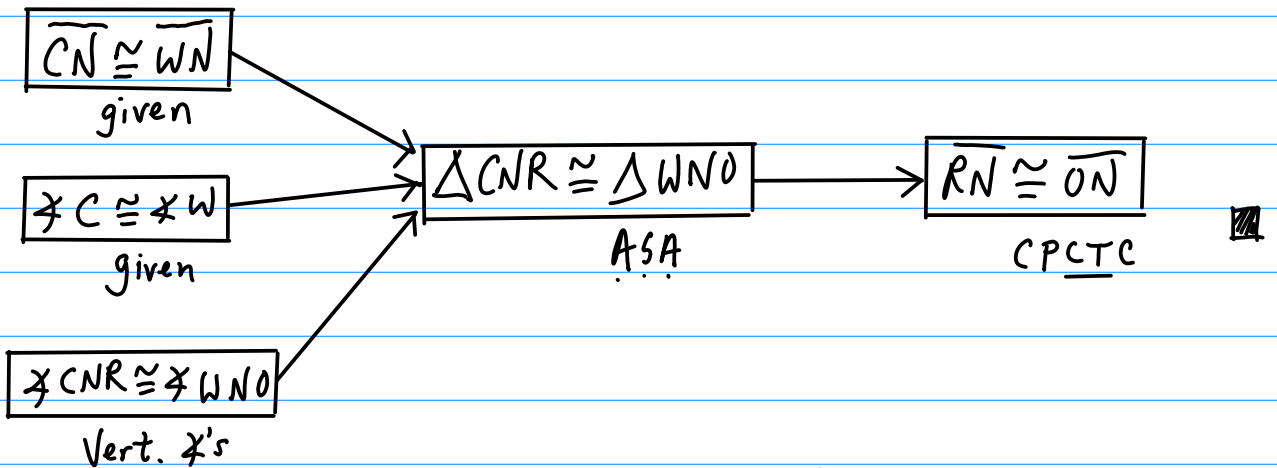
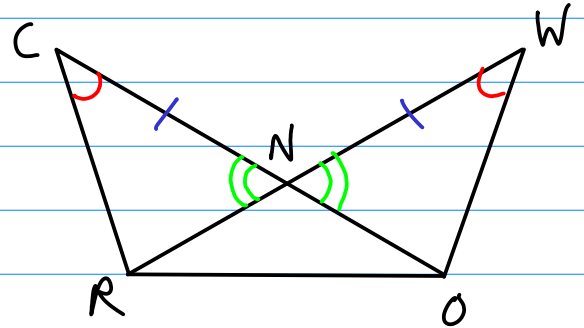


§4.7: Flowchart Proofs

Ex: (Do Now)

Given: $\overline{CN} \cong \overline{WN}$; $\sphericalangle C \cong \sphericalangle W$

Prove: $\overline{RN} \cong \overline{ON}$



Given: $\overline{FO} \cong \overline{FR}$; $\overline{UO} \cong \overline{UR}$

Prove: $\sphericalangle O \cong \sphericalangle R$

